



PRIMARY 3 WEIGHTED ASSESSMENT 1

Name: _____ () Date: 10 May
Class: Primary 3 Duration: 1 hour
Parent's Signature: _____ Marks: _____ / **15**


MATHEMATICS


INSTRUCTIONS TO CANDIDATES

1. Write your name, class and register number.
2. Do not turn over this page until you are told to do so.
3. Follow all instructions carefully.
4. Answer all questions.
5. The duration for paper is 1 hour.

Section A**Short Answer Questions**

Questions 1 to 10 carry 1 mark each. Write your answers in the boxes provided. For questions which require units, give your answers in the units stated. [5 marks]

1. What digit does  represent?

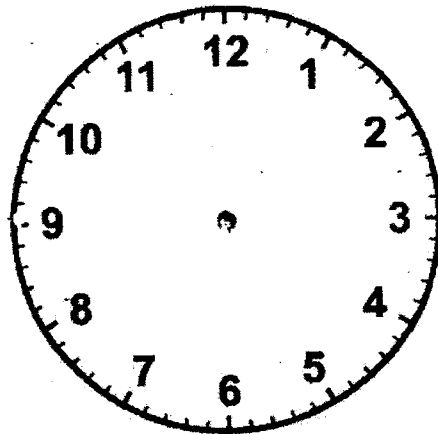
1	2	9	4
+ 6		3	1
7	5	2	5

2. Arrange the fractions from the smallest to the greatest.

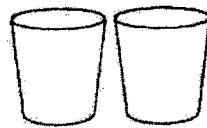
$$\frac{3}{9}, \frac{1}{9}, \frac{4}{9}$$

smallest

3. Draw the missing hands on the clock to show 9.30.



4. Look at the picture given.
The bottle of milk contains _____ ℓ of milk.

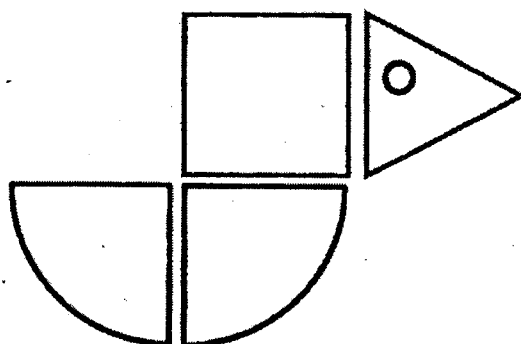


1 ℓ of milk



ℓ

5. Colour the quarter circles in the figure below.



Section BQuestions 6 to 10 carry **2 marks** each.

Show all your workings and statements clearly.

[10 marks]

-
6. There are 20 apples and bananas altogether.
There are 4 times as many apples as bananas.
How many bananas are there?

There are _____ bananas.

Ans : _____

7. A pair of socks costs \$8.
A shirt costs \$20 more than a pair of socks.
How much does **2 such shirts** cost?

The 2 shirts cost \$_____.

Ans : \$ _____

8. Sam is 170 cm tall.
Betty is 12 cm shorter than Sam.
Daniel is 6 cm taller than Betty.
What is Daniel's height?

Daniel is _____ cm tall.

Ans : _____ cm












9. Kelly and Mandy had the same number of stamps. After Mandy gave Kelly 5 stamps, the number of stamps Kelly had became 30.
How many stamps did Kelly and Mandy have altogether at first?

Kelly and Mandy had _____ stamps altogether.

Ans: _____

10. The picture graph shows the number of children at the library who borrowed books.

Each of them borrowed only 1 book.

Books Borrowed by Children	
Comics	  
Fairy Tales	
Fantasy	   
Non-fiction	 
Each  stands for 3 children.	

There were 50 children who visited the library.
How many children did not borrow any books?

_____ children did not borrow any books.

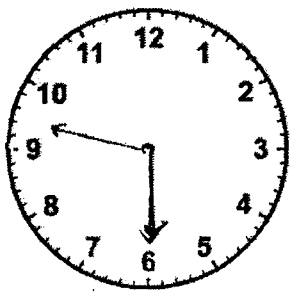
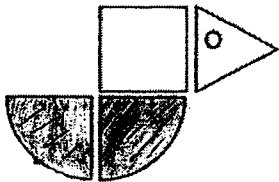
Ans: _____

End of Paper

ANSWER KEY

LEVEL : Primary 3
 SCHOOL : Tao Nan School
 SUBJECT : MATHEMATICS
 TERM : Weighted Assessment 1

Weighted Assessment 1

Q1	5-1-2=2	Q2	$\frac{1}{9} \cdot \frac{3}{9} \cdot \frac{4}{9}$
Q3		Q4	6 ÷ 2 = 3 3 × 1 = 3
Q5		Q6	20 ÷ 5 = 4
Q7	20+8=28 28+28=56	Q8	170-12=158 158+6=164
Q9	30-5=25 25+25=50	Q10	9+3+12+6=30 50-30=20

